

17.11.20

LI: To subtract by jumping back on a number line





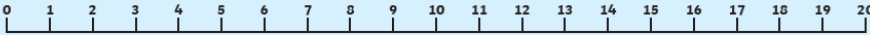
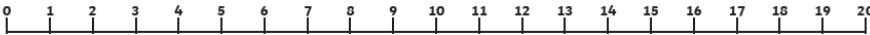
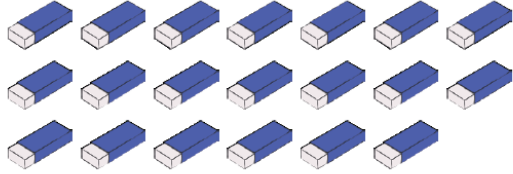
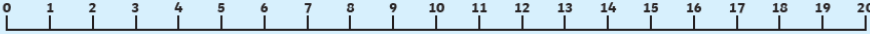
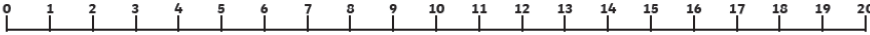
Number Line Subtraction

Example:

$15 - 5 = 10$	
---------------	--

$15 - 3 =$	
$8 - 5 =$	
$12 - 6 =$	
$14 - 2 =$	
$9 - 4 =$	
$10 - 6 =$	
$15 - 8 =$	
$11 - 3 =$	
$13 - 6 =$	
$12 - 7 =$	

Write down the answers in the circles.

 $- \bigcirc = 3$  $- 13 = \bigcirc$  $18 - \bigcirc = 9$  $- 9 = \bigcirc$  $\bigcirc - 7 = 8$ 