

23.11.20

LI: To recognise coins and understand their values

Recognising Coins

6a. What is the value of each set?

a.  b. 

 VF

7a. Circle the coins that total 22p.



 VF

8a. Circle the set of coins with the least value.




 VF

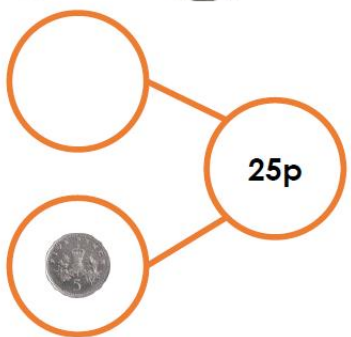
9a. Order the coins from least to most value.




 VF

10a. Use two of these coins to complete the part whole model.







Use this space to record your answers

Reasoning and Problem solving questions

4b. Phillis has three coins in her pocket. They total £5.

Her friend Mikey says,







Phillis must have a £2 coin and two £1 coins.

Is he correct? Explain your answer.



R

5b. Complete the table.

Coin	Value	Colour	Equivalent value in 10ps
	50p		
		silver	
	£1		



PS

6b. Make 22p in as many different ways as you can using these coins. Use three coins or less.



PS

Use this space for working out
