
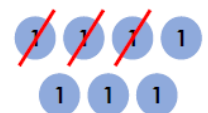


18.11.20

LI: To subtract with 2 digit numbers

1 Write a calculation to match the chart below and complete the answer.

Tens	Ones
	

- =

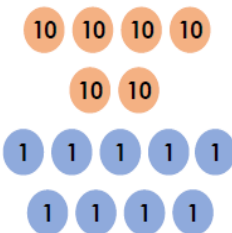
VF

4 Work out the calculation below.

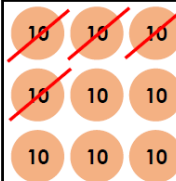

	7	8
-	2	5

2 True or false?

	6	9
-	5	7
	2	2

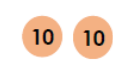



5 Explain the mistake below.

Tens	Ones
	

$92 - 42 = 51$

3 Circle the correct answer.

Tens	Ones
	

subtract 12

13

12

11

6 Ian has subtracted a number from 78. He has put counters into a place value chart to show his answer.

Tens	Ones
	

What number did he subtract?

Answer Sheet

1. **$37 - 13 = 24$**
2. **False, the answer is 12**
3. **11**
4. **53**
5. **The answer is 50 because both ones have been subtracted**
6. **56**

You need 5 more 10's counters and 6 more 1's counters to make 78.

$$**78 - 56 = 22**$$